

Name:

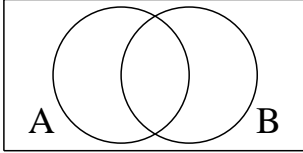
Class/Set:

# Shading Sets

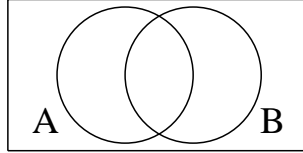
Malvern St James

1: Shade the following regions:

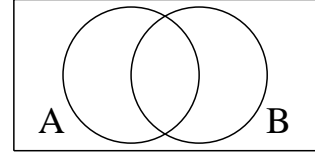
a)  $A' \cup B'$



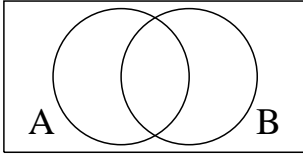
b)  $A'$



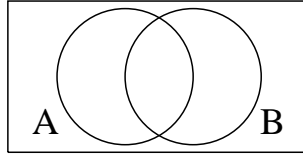
c)  $(A \cup B)'$



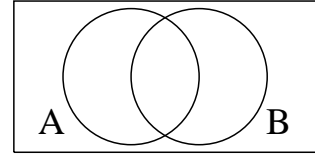
d)  $A \cap B$



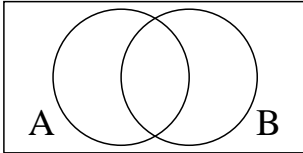
e)  $B'$



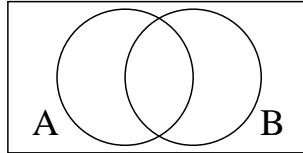
f)  $(A \cap B)'$



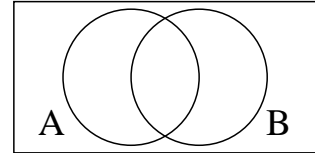
g)  $A' \cap B'$



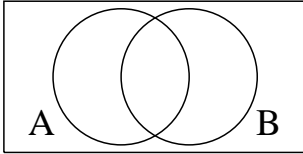
h)  $A' \cup B$



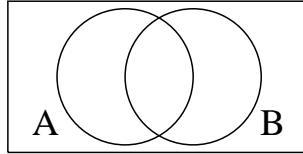
i)  $A \cup B'$



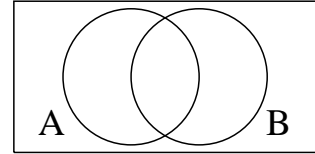
j)  $A \cup B$



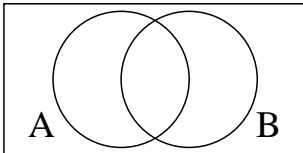
k)  $A' \cap B$



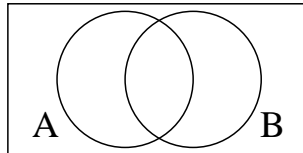
l)  $A \cap B'$



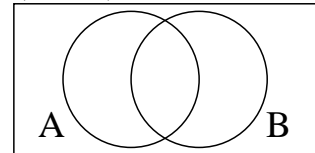
m)  $A \cap B$



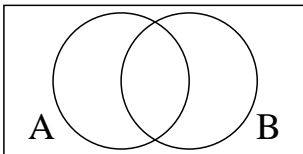
n)  $A' \cup B'$



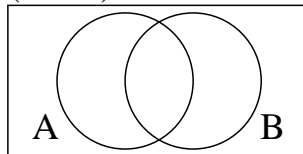
o)  $(A \cap B)'$



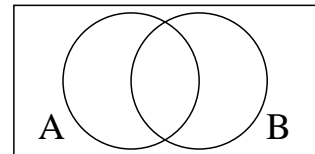
p)  $B'$



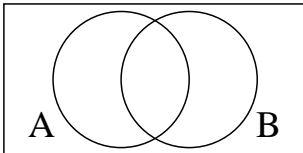
q)  $(A \cup B)'$



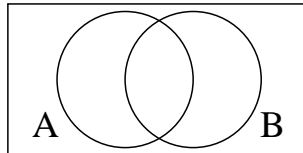
r)  $A' \cup B$



s)  $A'$



t)  $A' \cap B$



u)  $A \cap B'$

