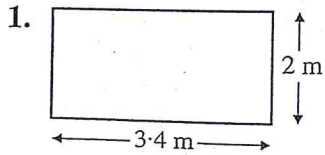
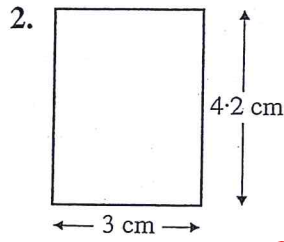


Exercise 16C

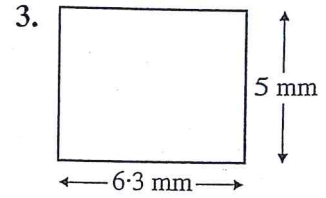
Find the area of each rectangle.



6.8 m^2



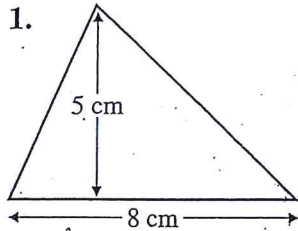
12.6 cm^2



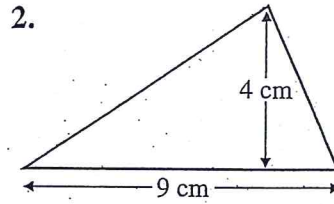
31.5 mm^2

Exercise 16F

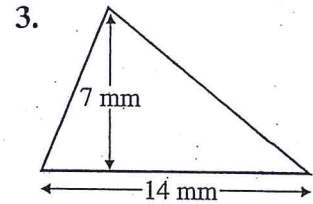
Find the area of each triangle.



20 cm^2



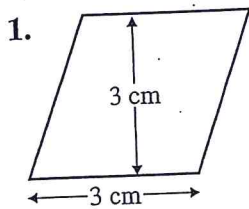
18 cm^2



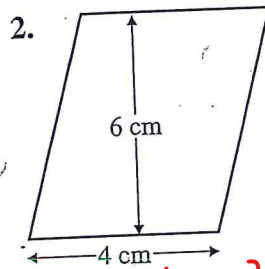
49 mm^2

Exercise 16E

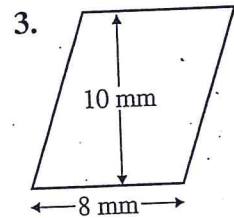
Find the area of each parallelogram.



9 cm^2



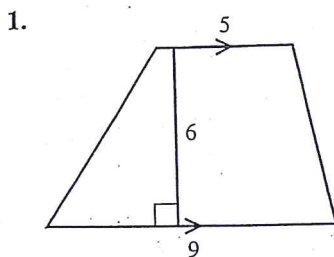
24 cm^2



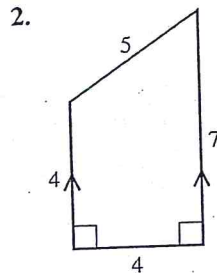
80 mm^2

Exercise 10

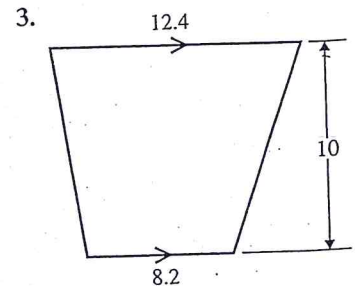
For Questions 1 to 6, find the area of each shape. All lengths are in cm.



42



22



103